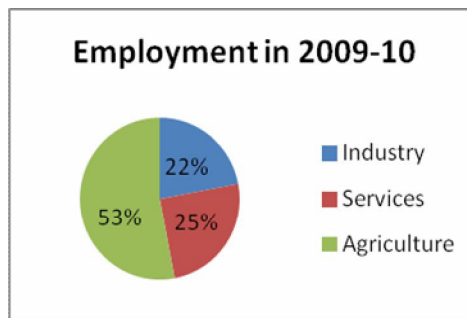
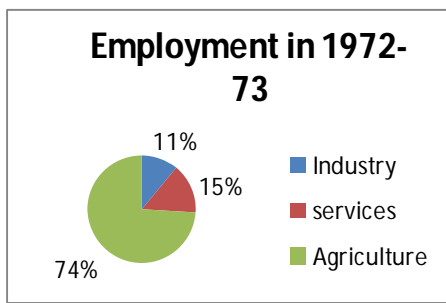


wells draws water from storages and lowers the water availability in them. Depending on comparative rates of inflow and outflow we can judge what is happening to the stock of water over many years. The question that we face today is the depletion of ground water storages and a tendency no to care about the availability for future generations.

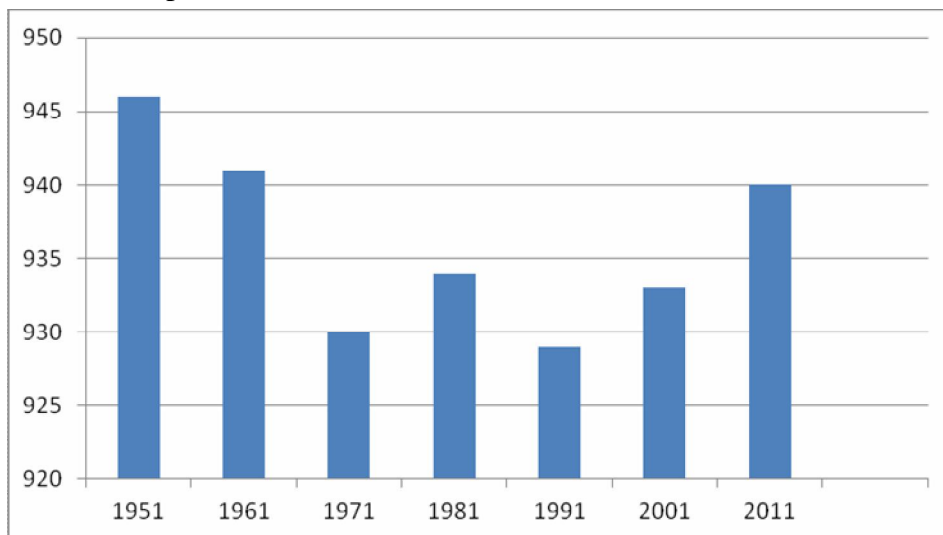
3. a) Observe the Pie diagrams given and prepare a table in the information given..Sectarian shares of employment



(OR)

- b) Observe the graph given and answer the questions follows:

India Population: Sex Ratio 1951-2011 No of females for 1000 male



- For how many years did counting of population take place?
- What should be the reason behind the differences in sex ratio?
- How many males are there in 1991 to 929 females?
- In which year do we find healthy sex ratio?

4. Mark the following in the given Map of India:

- a) i) Himalayas ii) River Narmada iii) Lakshadweep iv) Thar Desert

(OR)

- b) i) River Godavari ii) Shimla iii) Western Ghats iv) Goa

PART – II

6X 2= 12 Marks

Note:

- i) Answer all the questions.
- ii) Each question carries Two Marks.
- iii) Each answer to be written in 4 or 5 sentences

5. Examine the role of money in the life of human.
6. Write any four slogans to prevent environmental pollution.
7. How can you say the flexibility in labour laws help the present companies?
8. How does Indian agriculture today influenced by the Himalayas.
9. How did the settlement help the change of human life style?
10. Observe the table given and prepare bar graph with the information given.

Name of the country	Expected years of schooling
Srilanka	12.7
India	10.7
Pakistan	7.3
Bangladesh	8.1

Note on the table: Number of years of schooling that a child of school entry age can expect to receive given the present environment rates.

PART –III

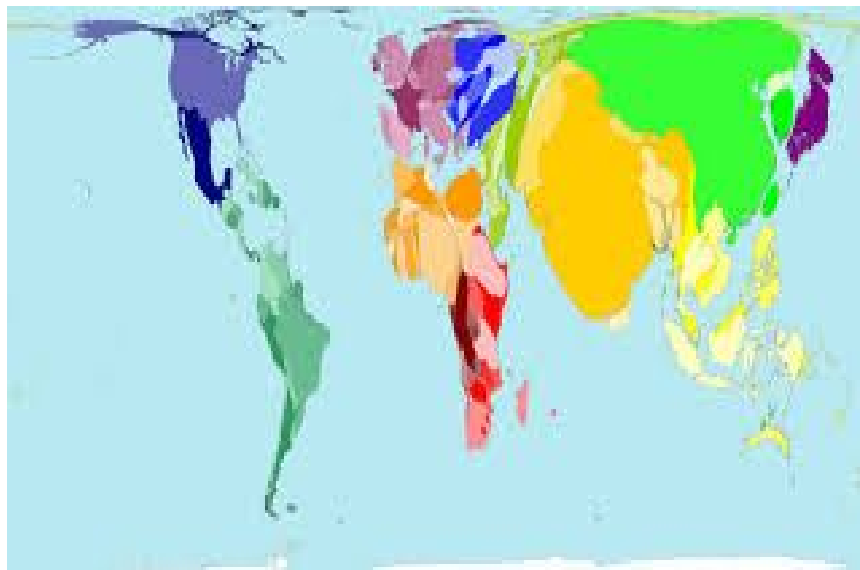
7X 1= 7 Marks

- Note:
- i) Answer all the questions.
 - ii) Each question carries One Marks.
 - iii) Answer each question in one or two sentences.

11. Write down the three basic concepts to understand settlements?
12. Name the importance of the third sector in the economic system.

13. Write about urbanization.
14. What is the benefit of Adarsh Gram Yojana?
15. How are latitudes helpful to man?

Read the given world map and answer the questions 16 & 17



(if we were to show the area of countries on the basis of population the world would look like this)

16. Name any two Latin American countries.
17. Why is India looking larger?

PART – IV

10X ½ = 5 Marks

Note:

- i) Answer all the questions.
- ii) Each question carries ½ Mark.
- iii) Each question has four alternatives. Select the right alternative given and write it in the answer sheet along with the question number.

18. Mega city means
- A) A city that has more than one crore people
 - B) A city that has about 40 lakhs people.
 - C) A city that has more than 10 lakhs people.

- D) The urban area where the population is between 5000 to 1 lakh.
19. One of the following has more security in employment
A) Organized sector C) Agricultural Sector
B) Unorganized sector D) Transport sector
20. The following is a peninsular river
A) Godavari River B) The river Ganga
C) The river Krishna D) The river Brahmaputra
21. The coast of Maharashtra, Goa is
A) Canara C) Malabar
B) Konkan D) Coramandal
22. One of the following is related to children...
A) Teenage Group C) above 15 years of age.
B) Having no right to vote D) below 15 years of age.
23. Globalization means
A) Rapid integration of States C) Rapid integration of People
B) Rapid integration of Regions D) Rapid integration of Nations (countries)
24. South India is in the following region.
A) Torrid Zone C) Cold Zone
B) Temperate Zone D) Half Temperate Zone and half torrid Zone
25. Chipko means..
A) Seperate C) Embrace
B) Revolution D) Thinking
26. The following is Multi national company
A) Public sector C) It controls the product in one country
B) Public and Private sector D) it controls the product in many countries
27. In India the monsoons start in this month...
A) April C) June
B) May D) July

#####